

CS 2150 Final Exam

Name _____

You **MUST** write your e-mail ID on **EACH** page and bubble in your userid at the bottom of this first page. And put your name on the top of this page, too.

If you are still writing when “pens down” is called, your exam will be ripped up and not graded – even if you are still writing to fill in the bubble form. So please do that first. Sorry to have to be strict on this!

Other than bubbling in your userid at the bottom of this page, please do not write in the footer section of this page.

There are 10 pages to this exam. Once the exam starts, please make sure you have all the pages. Questions are worth different amounts of points.

If you do not bubble in this first page properly, you will not receive credit for the exam!

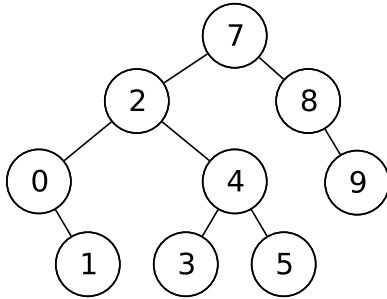
This exam is CLOSED text book, closed-notes, closed-calculator, closed-cell phone, closed-computer, closed-neighbor, etc. Questions are worth different amounts, so be sure to look over all the questions and plan your time accordingly. Please sign the honor pledge below.

*Serious error.
All shortcuts have disappeared.
Screen. Mind. Both are blank.*

(the bubble footer is automatically inserted into this space)

Page 3: Trees & Hashes & IBCM

4. [3 points] Insert 6 into the AVL tree below. Show the resulting data structure.



5. [3 points] What is the running time of a hash table (for insert, remove, and find) that uses a probing strategy as the collision resolution protocol?
6. [6 points] We have seen how IBCM performs one-dimensional array subscripting. List the IBCM commands to perform two-dimensional array subscripting? Assume that the array base address is at a , it has r rows and c columns, and you want value $a[x][y]$. Your commands should be left in opcode form. You may use any other variables that you wish, but briefly explain what they are if it is not obvious. Please only include the IBCM commands requested – we are not looking for a complete IBCM program.

Page 8: Graphs

19. [6 points] We have studied Dijkstra's algorithm for finding the shortest path. One of the assumptions for Dijkstra's algorithm is that there are no negative cost edges. For this question, you will need to design an algorithm to find the shortest path in a graph that *does* have negative cost edges. You may assume that there are no negative cost cycles, and that the graph is fully connected. You can list it as English steps or as a paragraph – no need to write C++ code. What is the running time of your algorithm?
20. [3 points] Give two real-world applications of minimum spanning trees.
21. [3 points] For an unweighted graph, we can either use Dijkstra's algorithm to find the shortest path, or breadth-first search. Which is faster? Why?

Page 9: Demographics**Name:** _____

We meant to ask these in an end-of-the-semester survey, but we did not get to it in time. So we'll put it here for some extra points on the exam!

22. [0 points] Did you put your name and userid at the top of this page? You need to in order to get the points on this page.

23. [2 points] What is your major or minor (if you have not declared, then your intended major or minor)? Please circle one.

- BS CS
- BA CS
- BS CpE
- CS minor
- Neither majoring nor minoring in computing
- Other (please explain): _____

24. [2 points] What CS 1 class did you take? Please circle one.

- CS 1110 (a.k.a. CS 101)
- CS 1111 (a.k.a. CS 101-E)
- CS 1112 (a.k.a. CS 101-X)
- CS 1120 (a.k.a. CS 150)
- AP credit
- Transfer credit
- Placed out of it via the CS 101/1110 placement exam
- Other (please explain): _____

25. [2 points] If you took your CS 1 class in college (i.e. CS 101/1110, 101-E/1111, 101-X/1112, 150/1120, or a transfer class), in what semester did you take it?

26. [2 points] What CS 2 class did you take? Please circle one.

- CS 2110 (a.k.a. 201)
- CS 2220 (a.k.a. 205)
- AP credit
- Transfer credit
- Other (please explain): _____



27. [2 points] If you took your CS 2 class in college (i.e. CS 201/2110, 205/2220, or a transfer class), in what semester did you take it?

28. [2 points] Did you attend the final exam review session? You'll get full credit for this question, as long as you answer it honestly (we know most of the people that were there, but not all).

Page 10: When Dijkstra's shortest path algorithm fails...

MY ROAD TRIP WITH MY BROTHER RAN INTO TROUBLE
AROUND PAGE THREE OF THE GOOGLE MAPS PRINTOUT.

← 70. SIGHT LEFT AT RT-22.	GO 6.8 MI
→ 71. TURN RIGHT TO STAY ON RT-22.	GO 2.6 MI
← 72. TURN LEFT AT LAKE SHORE RD.	GO 312 FT
→ 73. TURN RIGHT AT DOCK ST.	GO 427 FT
~~~~ 74. TAKE THE FERRY ACROSS THE LAKE.	GO 2.8 MI



~~~~ 74. TAKE THE FERRY ACROSS THE LAKE.	GO 2.8 MI
↗ 75. CLIMB THE HILL TOWARD HANGMAN'S RIDGE, AVOIDING ANY MOUNTAIN LIONS.	UP 1,172 FT
↻ 76. WHEN YOU REACH AN OLD BARN, GO AROUND BACK, KNOCK ON THE SECOND DOOR, AND ASK FOR CHARLIE.	GO 52 FT
☹ 77. TELL CHARLIE THE DANCING STONES ARE RESTLESS. HE WILL GIVE YOU HIS VAN.	CAREFUL
♀ 78. TAKE CHARLIE'S VAN DOWN OLD MINE ROAD. DO NOT WAKE THE STRAW MAN.	GO 11 MI
← 79. TURN LEFT ON COMSTOCK. WHEN YOU FEEL THE BLOOD CHILL IN YOUR VEINS, STOP THE VAN AND GET OUT.	GO 3.2 MI
↓ 80. STAND VERY STILL. EXITS ARE NORTH, SOUTH, AND EAST, BUT ARE BLOCKED BY A SPECTRAL WOLF.	GO 0 FT
☹ 81. THE SPECTRAL WOLF FEARS ONLY FIRE. THE GOOGLE MAPS TEAM CAN NO LONGER HELP YOU, BUT IF YOU MASTER THE WOLF, HE WILL GUIDE YOU. GOOSPEED.	GO ?? MI

(from <http://xkcd.com/461/>)